

Lesson 1A HW

Name: _____

Date: _____

Math: _____

Decimal Computation Unit: Reading/Writing Decimals **HOMEWORK**
(Reference page 799 in your book or your notes for help)

1. Fill in the place value chart. Use it for the remaining problems.

_____ / _____ / _____ 0 _____

2. Write a decimal for the given words.

- a. Forty-one ten-thousandths

- b. eighteen and five hundred four thousandths

- c. seven and sixty-three hundredths

- d. sixty-five and two hundred one thousandths

3. Write each decimal in words.

- a. 0.06

- b. 4.705

- c. 145.012

- d. 6.020

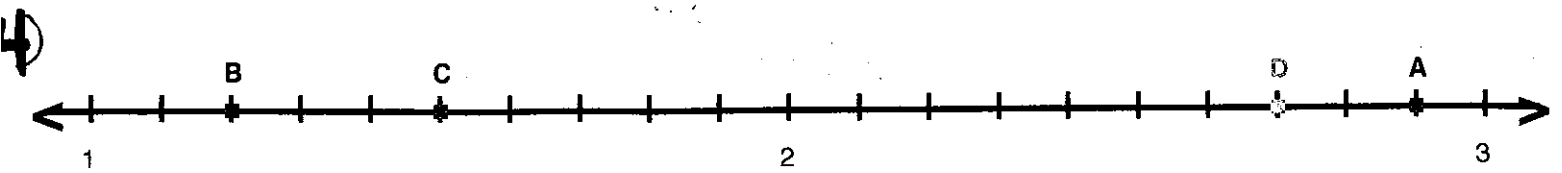
back →

NAME: _____

DATE: _____

MATH: _____

DIRECTIONS For each point, identify the decimal and write it using words.

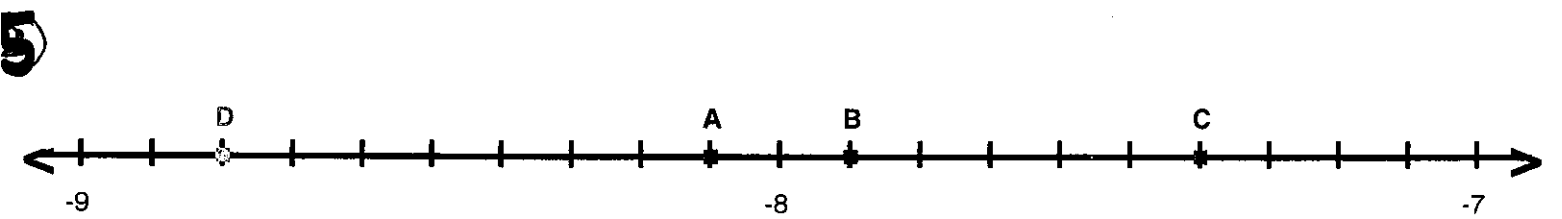


A = _____

B = _____

C = _____

D = _____



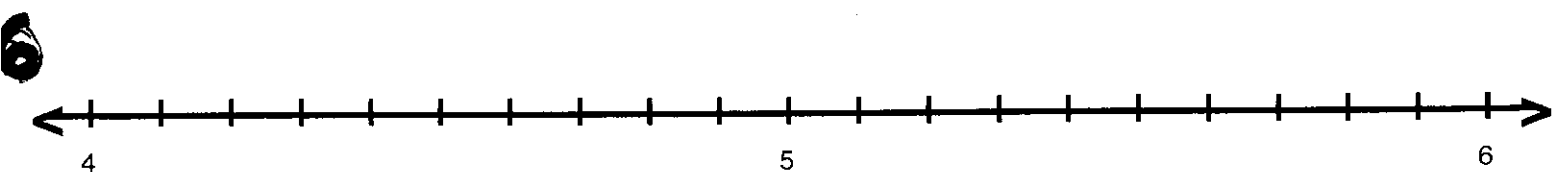
A = _____

B = _____

C = _____

D = _____

Now, place each letter on the correct point.



A = 4.3

B = 5.1

C = 4.8

D = 4.5